



Please write clearly in block capitals.

Centre number

--	--	--	--	--

Candidate number

--	--	--	--

Surname

Forename(s)

Candidate signature

AS CHEMISTRY

Paper 1: Inorganic and Physical Chemistry

Friday 27 May 2016

Morning

Time allowed: 1 hour 30 minutes

Materials

For this paper you must have:

- the Periodic Table/Data Sheet, provided as an insert (enclosed)
- a ruler with millimetre measurements
- a calculator, which you are expected to use where appropriate.

Instructions

- Use black ink or black ball-point pen.
- Fill in the boxes at the top of this page.
- Answer **all** questions.
- You must answer the questions in the spaces provided. Do not write outside the box around each page or on blank pages.
- All working must be shown.
- Do all rough work in this book. Cross through any work you do not want to be marked.

Information

- The maximum mark for this paper is 80.
- The Periodic Table/Data Sheet is provided as an insert.

Advice

- You are advised to spend about 65 minutes on **Section A** and 25 minutes on **Section B**.
-



J U N 1 6 7 4 0 4 1 0 1

IB/JUN16/E4

7404/1

Section AAnswer **all** questions in this section.**1** This question is about electron configuration.**0 1** . **1** Give the full electron configuration of an Al atom and of a Cr³⁺ ion.**[2 marks]**

Al atom _____

Cr³⁺ ion _____**0 1** . **2** Deduce the formula of the ion that has a charge of 2+ with the same electron configuration as krypton.**[1 mark]**

0 1 . **3** Deduce the formula of the compound that contains 2+ ions and 3- ions that both have the same electron configuration as argon.**[1 mark]**



Turn over for the next question

**DO NOT WRITE ON THIS PAGE
ANSWER IN THE SPACES PROVIDED**



Turn over ►

2 This question is about Period 3 of the Periodic Table.

0 2 . **1** Deduce which of Na^+ and Mg^{2+} is the smaller ion.
Explain your answer.

[2 marks]

Smaller ion _____

Explanation _____

0 2 . **2** Write an equation to represent the process that occurs when the first ionisation energy for sodium is measured.

[1 mark]



- 3 This question is about a white solid, MHCO_3 , that dissolves in water and reacts with hydrochloric acid to give a salt.



A student was asked to design an experiment to determine a value for the M_r of MHCO_3 . The student dissolved 1464 mg of MHCO_3 in water and made the solution up to 250 cm^3 .

25.0 cm^3 samples of the solution were titrated with $0.102 \text{ mol dm}^{-3}$ hydrochloric acid. The results are shown in **Table 1**.

Table 1

	Rough	1	2	3
Initial burette reading / cm^3	0.00	10.00	19.50	29.25
Final burette reading / cm^3	10.00	19.50	29.25	38.90
Titre / cm^3	10.00	9.50	9.75	9.65

- 0 3 . 1 Calculate the mean titre and use this to determine the amount, in moles, of HCl that reacted with 25.0 cm^3 of the MHCO_3 solution.

[3 marks]

- 0 3 . 2 Calculate the amount, in moles, of MHCO_3 in 250 cm^3 of the solution. Then calculate the experimental value for the M_r of MHCO_3 . Give your answer to the appropriate number of significant figures.

[3 marks]

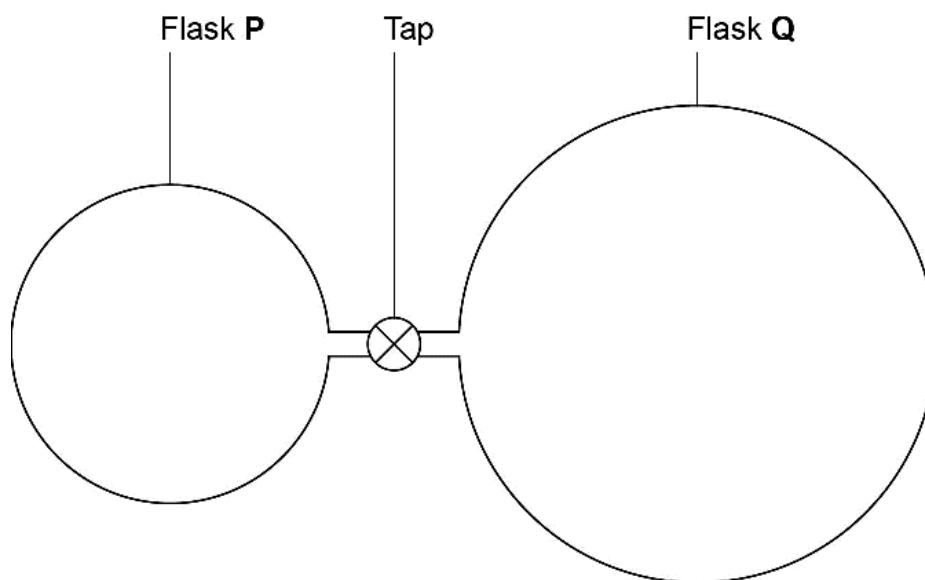




5 **Figure 2** represents two glass flasks, **P** and **Q**, connected via a tap.

Flask **Q** (volume = $1.00 \times 10^3 \text{ cm}^3$) is filled with ammonia (NH_3) at 102 kPa and 300 K. The tap is closed and there is a vacuum in flask **P**.
(Gas constant $R = 8.31 \text{ J K}^{-1} \text{ mol}^{-1}$)

Figure 2



0 5 . **1** Calculate the mass of ammonia in flask **Q**.
Give your answer to the appropriate number of significant figures.

[3 marks]



0 5 . **2** When the tap is opened, ammonia passes into flask **P**. The temperature decreases by $5\text{ }^{\circ}\text{C}$. The final pressure in both flasks is 75.0 kPa . Calculate the volume, in cm^3 , of flask **P**.

[3 marks]

Turn over for the next question



6

- 0 6** . **1** Explain how ions are accelerated, detected and have their abundance determined in a time of flight (TOF) mass spectrometer.

[3 marks]

- 0 6** . **2** Calculate the mass, in kg, of a single $^{52}\text{Cr}^+$ ion.
Assume that the mass of a $^{52}\text{Cr}^+$ ion is the same as that of a ^{52}Cr atom.

(The Avogadro constant $L = 6.022 \times 10^{23} \text{ mol}^{-1}$)

[1 mark]

- 0 6** . **3** In a TOF mass spectrometer the kinetic energy (KE) of a $^{52}\text{Cr}^+$ ion was $1.269 \times 10^{-13} \text{ J}$

Calculate the velocity of the ion using the equation.

$$\text{KE} = \frac{1}{2}mv^2$$

($m = \text{mass/kg}$ and $v = \text{velocity/ms}^{-1}$)

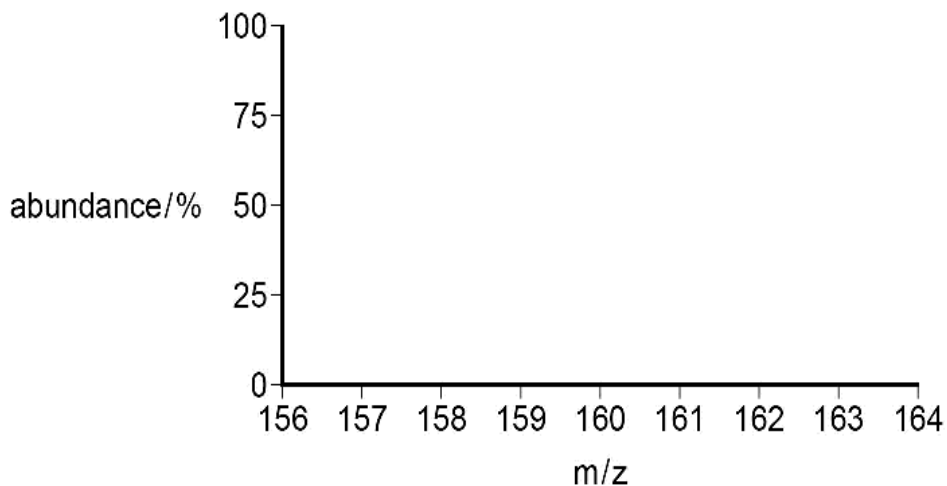
[2 marks]



- 0 6** . **4** Bromine has two isotopes, ^{79}Br and ^{81}Br , in approximately equal abundance. In a TOF mass spectrometer bromine forms ions with formula $[\text{Br}_2]^+$

Sketch the pattern of peaks you would expect to see in the mass spectrum of a sample of bromine.

[2 marks]



- 0 6** . **5** A sample of xenon has $A_r = 131.31$. The sample consists of four isotopes. The abundances of three of the isotopes are shown in **Table 3**. The data for one of the isotopes, ^mXe , is missing.

Table 3

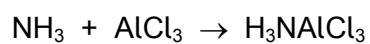
Isotope	^{129}Xe	^{131}Xe	^{132}Xe	^mXe
% abundance	28.0	25.0	27.0	To be calculated

Use the data to calculate the abundance of isotope ^mXe and calculate m , the mass number of ^mXe . Show your working.

[4 marks]



7 Ammonia reacts with aluminium chloride as shown by the equation:



0 7 . **1** Draw diagrams to illustrate the shapes of NH_3 molecules and of AlCl_3 molecules.

Include in your diagrams any lone pairs of electrons that influence the shape.

Indicate the values of the bond angles.

[3 marks]



0 7 . **2** Name the type of bond formed between N and Al in H_3NAlCl_3 and explain how this bond is formed.

[2 marks]

Type of bond _____

Explanation _____

0 7 . **3** Explain how the value of the Cl-Al-Cl bond angle in AlCl_3 changes, if at all, on formation of the compound H_3NAlCl_3

[2 marks]

Turn over for the next question



- 8 A student oxidised a solution of hydrochloric acid with a few drops of sodium chlorate(I) solution. The reaction mixture effervesced and turned pale green. The gas formed bleached universal indicator paper.

0 8 . 1 Write a half-equation for the oxidation of chloride ions.

[1 mark]

0 8 . 2 Write a half-equation for the reduction of chlorate(I) ions to chlorine in acidic conditions.

[1 mark]

0 8 . 3 Write an overall equation for the redox reaction of chlorate(I) ions with hydrochloric acid.

[1 mark]

0 8 . 4 A solution of sodium chlorate(I) was added to a colourless solution of potassium iodide.
Suggest what is observed.

Explain the reaction that leads to this observation.

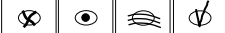


[3 marks]



Section B

Answer **all** questions in the spaces providedOnly **one** answer per question is allowed.

For each answer completely fill in the circle alongside the appropriate answer.

CORRECT METHOD WRONG METHODS If you want to change your answer you must cross out your original answer as shown. If you wish to return to an answer previously crossed out, ring the answer you now wish to select as shown. You may do your working out in the blank spaces around the questions but this will not be marked. Do **not** use additional sheets for this working.

1 0

Which element is in the d-block of the Periodic Table?

[1 mark]

A Selenium

B Antimony

C Tantalum

D Lead

1 1

Which species contains an element with an oxidation state of +4?

[1 mark]

A NO_2^+ B ClO_3^- C H_2SO_3 D PCl_5 

1 2

There are 392 mol of pure gold in a bar measuring 10 cm by 10 cm by 40 cm.
What is the density of gold in kg dm^{-3} ?

[1 mark]**A** 193**B** 19.3**C** 1.93**D** 0.193**1 3**

Ions of two isotopes of iron are



Which statement is correct?

[1 mark]

A The ions of both the isotopes have the electronic configuration $1s^2 2s^2 2p^6 3s^2 3p^6 4s^2 3d^6$

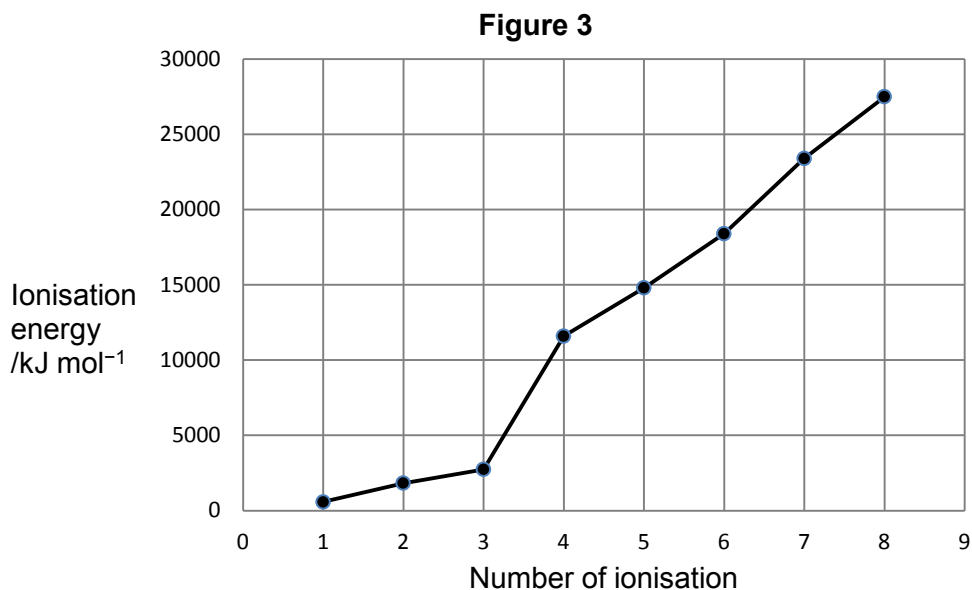
B The ions of both the isotopes contains 26 neutrons

C $^{53}\text{Fe}^{2+}$ has fewer protons than $^{56}\text{Fe}^{2+}$

D After acceleration to the same kinetic energy $^{56}\text{Fe}^{2+}$ will move more slowly than $^{53}\text{Fe}^{2+}$



1 4

The successive ionisation energies for element X are shown in **Figure 3**.

Which element is X?


[1 mark]**A** Nitrogen**B** Phosphorus**C** Aluminium**D** Boron

1 5

Which of these decreases down Group 2?

[1 mark]**A** First ionisation energy**B** Atomic radius**C** Number of protons**D** Reactivity with water

Refer to the unbalanced equation below when answering questions **16** and **17**.

**1 6**

In the balanced equation the mole ratio for sulfuric acid to water is

A 1 : 4

B 1 : 2

C 4 : 7

D 4 : 9

[1 mark]**1 7**

What is the reducing agent in this reaction?

A H^+

B $\text{C}_2\text{O}_4^{2-}$

C K^+

D $\text{Cr}_2\text{O}_7^{2-}$

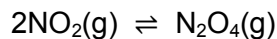
[1 mark]

1 8

Which substance exists as a macromolecule?

[1 mark]**A** Cu**B** SiO₂**C** P₄O₁₀**D** MgO**1 9**

A pale brown mixture of NO₂ and N₂O₄ is allowed to reach equilibrium in a sealed gas syringe according to the following equation.



When the plunger is pushed further into the syringe the pressure increases and the mixture becomes paler in colour.

When the syringe is placed in a hot oven the mixture becomes darker in colour.

Which of the following statements is correct?

[1 mark]**A** NO₂ is brown and the forward reaction is exothermic.**B** NO₂ is brown and the forward reaction is endothermic.**C** NO₂ is colourless and the forward reaction is exothermic.**D** NO₂ is colourless and the forward reaction is endothermic.

2	0
---	---

Which molecule has the largest dipole?

A ClF_3 B BF_3 C SF_6 D CF_4

[1 mark]

2	1
---	---

In a molecule of a hydrocarbon, the fraction by mass of carbon is $\frac{9}{11}$

What is the empirical formula of the hydrocarbon?

A CH

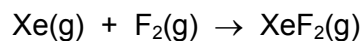
B CH_3 C C_3H_8 D C_5H_{12}

[1 mark]



2 2

30 cm³ of xenon are mixed with 20 cm³ of fluorine. The gases react according to the following equation. Assume that the temperature and pressure remain constant.



What is the final volume of gas after the reaction is complete?

A 50 cm³

B 40 cm³

C 30 cm³

D 20 cm³

[1 mark]**2 3**

Which of the following solutions would react exactly with a solution containing 0.0500 mol sulfuric acid?

A 50.0 cm³ of 1.00 mol dm⁻³ KOH

B 100.0 cm³ of 2.00 mol dm⁻³ KOH

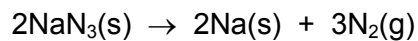
C 100.0 cm³ of 2.00 mol dm⁻³ Ba(OH)₂

D 50.0 cm³ of 1.00 mol dm⁻³ Ba(OH)₂

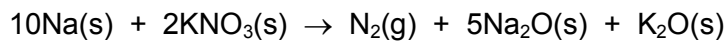
[1 mark]

2 4

In a car airbag, sodium azide (NaN_3) decomposes to form sodium metal and nitrogen gas.



The sodium metal then reacts with potassium nitrate to produce more nitrogen gas.



If 2.00 mol of sodium azide react in this way, how many molecules of N_2 will be formed?

(The Avogadro constant $L = 6.022 \times 10^{23} \text{ mol}^{-1}$)

[1 mark]

A 2.41×10^{24}

B 1.93×10^{24}

C 1.81×10^{24}

D 9.63×10^{23}

END OF QUESTIONS



There are no questions printed on this page

**DO NOT WRITE ON THIS PAGE
ANSWER IN THE SPACES PROVIDED**



There are no questions printed on this page

**DO NOT WRITE ON THIS PAGE
ANSWER IN THE SPACES PROVIDED**



There are no questions printed on this page

**DO NOT WRITE ON THIS PAGE
ANSWER IN THE SPACES PROVIDED**

Copyright Information

For confidentiality purposes, from the November 2015 examination series, acknowledgements of third party copyright material will be published in a separate booklet rather than including them on the examination paper or support materials. This booklet is published after each examination series and is available for free download from www.aqa.org.uk after the live examination series.

Permission to reproduce all copyright material has been applied for. In some cases, efforts to contact copyright-holders have been unsuccessful and AQA will be happy to rectify any omissions of acknowledgements. If you have any queries please contact the Copyright Team, AQA, Stag Hill House, Guildford, GU2 7XJ.

Copyright © 2016 AQA and its licensors. All rights reserved.

