

Enthalpy Change & Hess's Law

Question Paper 2

Level	International A Level
Subject	Chemistry
Exam Board	CIE
Topic	Chemical Energetics
Sub-Topic	Enthalpy Change & Hess's Law
Paper Type	Theory
Booklet	Question Paper 2

Time Allowed: 68 minutes

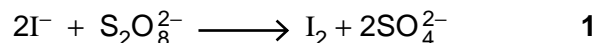
Score: /56

Percentage: /100


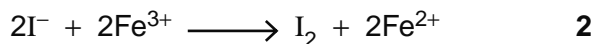
Grade Boundaries:

A*	A	B	C	D	E	U
>85%	77.5%	70%	62.5%	57.5%	45%	<45%

1(a) The reaction between iodide ions and persulfate ions, $\text{S}_2\text{O}_8^{2-}$, is slow.



The reaction can be speeded up by adding a small amount of Fe^{2+} or Fe^{3+} ions. The following two reactions then take place.



(i) What type of catalysis is occurring here?

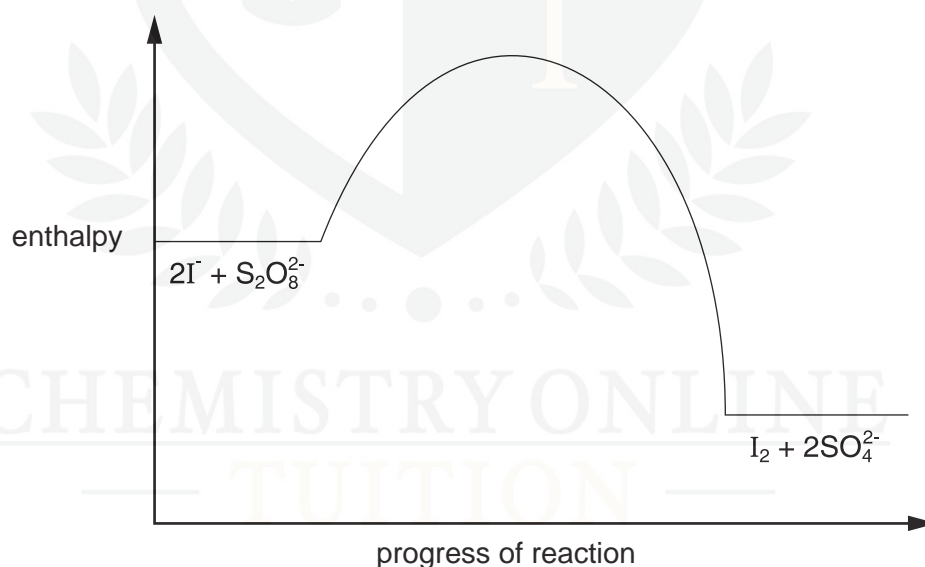
.....

(ii) The rates of reactions **2** and **3** are both faster than that of reaction **1**. By considering the species involved in these reactions, suggest a reason for this.

.....

.....

(iii) The following reaction pathway diagram shows the enthalpy profile of reaction **1**.



Use the same axes to draw the enthalpy profiles of reaction **2** followed by reaction **3**, starting reaction **2** at the same enthalpy level as reaction **1**.

[4]

(b) The oxidation of SO_2 to SO_3 in the atmosphere is speeded up by the presence of nitrogen oxides.

(i) Describe the environmental significance of this reaction.

.....

(ii) Describe a major source of SO_2 in the atmosphere.

.....

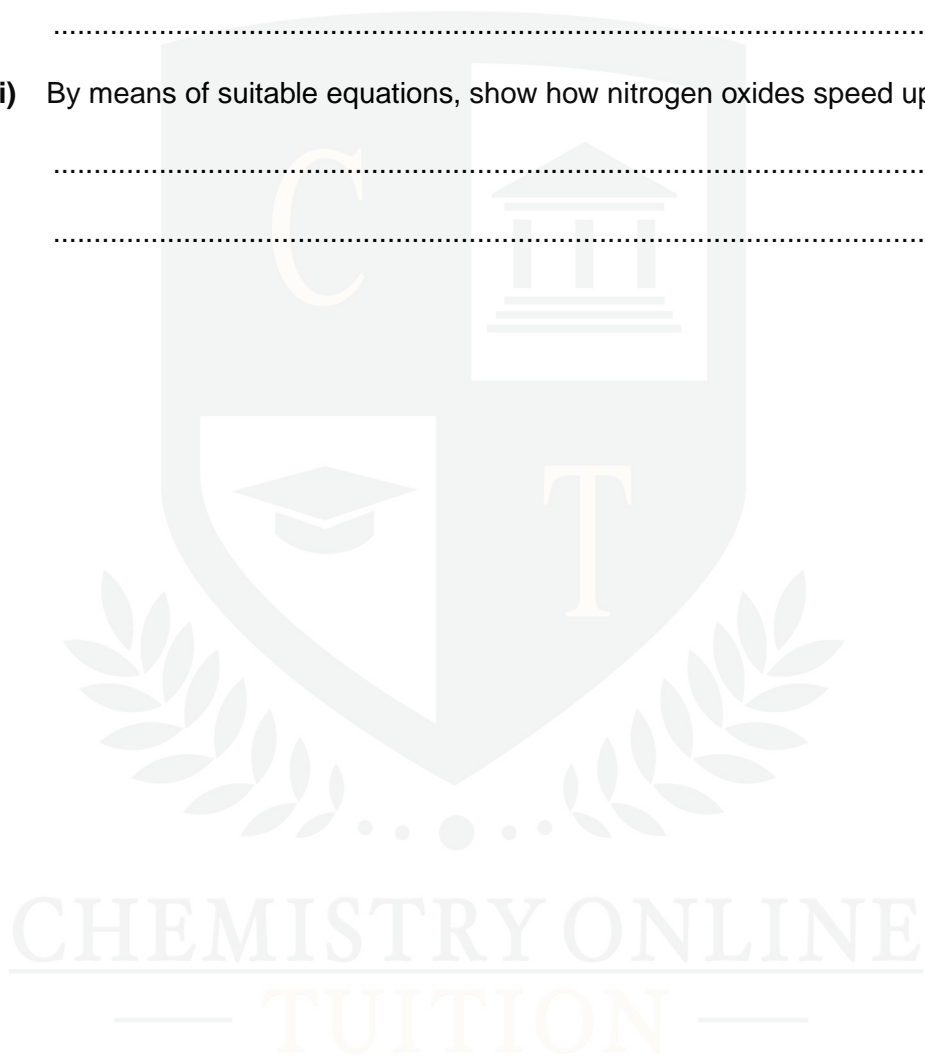
(iii) By means of suitable equations, show how nitrogen oxides speed up this reaction.

.....

.....

[4]

[Total: 8]



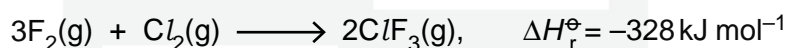
2 (a) What is meant by the term *bond energy*?

.....
.....[2]

(b) Describe and explain what is observed when a red-hot wire is plunged into separate samples of the gaseous hydrogen halides HCl and HI.
How are bond energy values useful in interpreting these observations?

.....
.....
.....
.....[3]

(c) The following reaction occurs in the gas phase.



Use these and other data from the *Data Booklet* to calculate the average bond energy of the Cl-F bond in ClF₃. [2]

[Total: 7]

CHEMISTRY ONLINE
— TUITION —

3 The elements of Group IV all form tetrachlorides with the general formula $MC\ell_4$.

(a) Draw a diagram of a molecule of $SiC\ell_4$ stating bond angles.

[2]

(b) Describe and explain how the volatilities of the Group IV chlorides vary down the group.

.....
.....
..... [2]

(c) The relative stabilities of the $M^{2+}(aq)$ and $M^{4+}(aq)$ ions also vary down Group IV.

(i) Use the *Data Booklet* to illustrate this observation when $M = Sn$ and $M = Pb$.

.....
.....
.....

(ii) Use the *Data Booklet* to predict the products formed, and write equations for the reactions occurring, when

- an equimolar mixture of $Sn^{2+}(aq)$ and $Sn^{4+}(aq)$ is added to $I_2(aq)$,

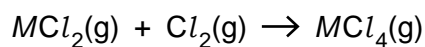
.....
.....

- an equimolar mixture of $Pb^{2+}(aq)$ and $Pb^{4+}(aq)$ is added to $SO_2(aq)$.

.....
.....

[4]

- (d) (i) The Sn–Cl bond energy is +315 kJ mol⁻¹. Use this and other values from the *Data Booklet* to calculate ΔH^\ominus for the reaction



for the following cases.

- $M = \text{Si}$

$\Delta H^\ominus = \dots\dots\dots$ kJ mol⁻¹

- $M = \text{Sn}$

$\Delta H^\ominus = \dots\dots\dots$ kJ mol⁻¹

- (ii) Do your results agree with the trend in relative stabilities of the +2 and +4 oxidation states in (c)? Explain your answer.

.....

.....

.....

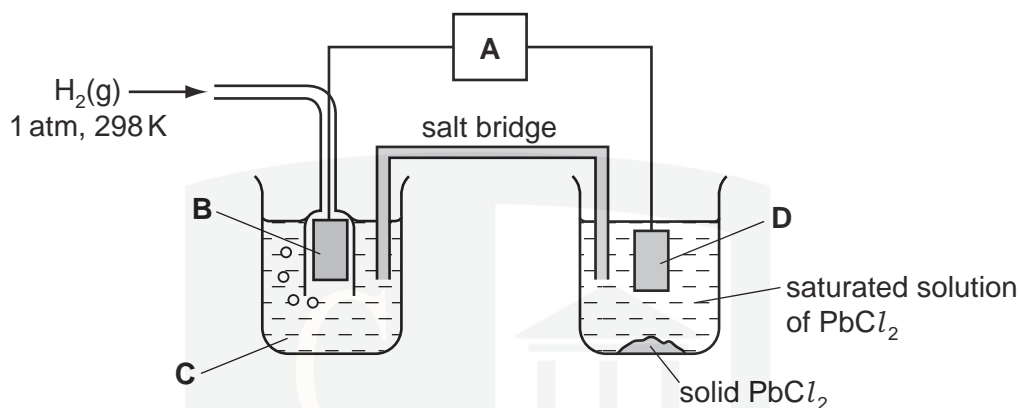
[3]

[Total: 11]

CHEMISTRY ONLINE
— TUITION —

- 4 Lead(II) chloride, PbCl_2 , can be used in the manufacture of some types of coloured glass.

PbCl_2 is only sparingly soluble in water. The $[\text{Pb}^{2+}]$ in a saturated solution of PbCl_2 can be estimated by measuring the cell potential, E_{cell} , of the following cell.



- (a) In the spaces below, identify what the four letters **A-D** in the above diagram represent.

A **B**
C **D**

[4]

- (b) In a saturated solution of PbCl_2 , $[\text{PbCl}_2(\text{aq})] = 3.5 \times 10^{-2} \text{ mol dm}^{-3}$.

- (i) The E° for the Pb^{2+}/Pb electrode is -0.13 V . Predict the potential of the right-hand electrode in the diagram above. Indicate this by placing a tick in the appropriate box in the table below.

electrode potential/V	place one tick only in this column
-0.17	
-0.13	
-0.09	
0.00	

Explain your answer.

.....

- (ii) Write an expression for the solubility product, K_{sp} , of $PbCl_2$.

.....

- (iii) Calculate the value of K_{sp} , including units.

$K_{sp} =$ units [5]

- (c) The behaviours of $PbCl_2$ and $SnCl_2$ towards reducing agents are similar, but their behaviours towards oxidising agents are very different.

- (i) Illustrate this comparison by quoting and comparing relevant E° values for the two metals and their ions. Explain what the relative E° values mean in terms of the ease of oxidation or reduction of these compounds.

.....
.....
.....
.....
.....
.....
.....

- (ii) Writing a balanced molecular or ionic equation in each case, suggest a reagent to carry out each of the following reactions.

the reduction of $PbCl_2$

.....

the oxidation of $SnCl_2$

.....

[5]

- (d) Write an equation to represent the lattice energy of PbCl_2 . Show state symbols.

.....

- (ii) Use the following data, together with appropriate data from the *Data Booklet*, to calculate a value for the lattice energy of PbCl_2 .

electron affinity of chlorine	=	-349 kJ mol^{-1}
enthalpy change of atomisation of lead	=	$+195 \text{ kJ mol}^{-1}$
enthalpy change of formation of $\text{PbCl}_2(\text{s})$	=	-359 kJ mol^{-1}

lattice energy = kJ mol^{-1}

- (iii) How might the lattice energy of PbCl_2 compare to that of PbBr_2 ? Explain your answer.

.....
CHEMISTRY ONLINE
.....
.....
TUITION
.....

[6]

[Total: 20]

5 Nitrogen oxides in the atmosphere are homogeneous catalysts in the formation of acid rain.

(a) What is meant by the following terms?

catalyst

.....

.....

homogeneous

.....

.....

[2]

(b) (i) State a major source of nitrogen oxides in the atmosphere, explaining how they are formed.

.....

.....

.....

(ii) Use equations to describe the chemical role played by nitrogen oxides in the formation of acid rain.

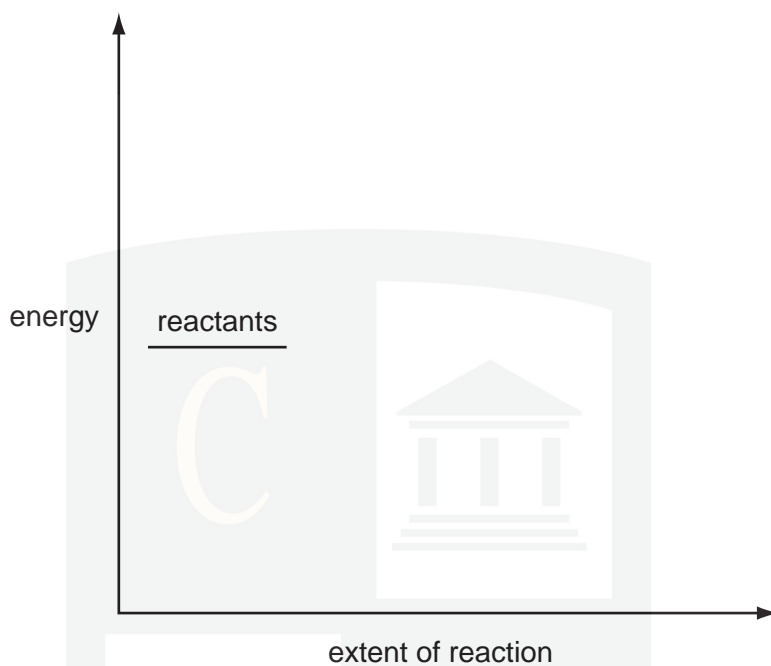
.....

.....

.....

[5]

- (c) Use the following axes to draw a fully labelled reaction pathway diagram showing the effect of a catalyst on an exothermic reaction. Label the ΔH and E_a values.



[3]

[Total: 10]

CHEMISTRY ONLINE
— TUITION —